

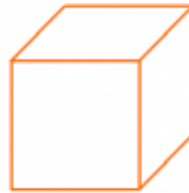
## Volume/Surface Area

1 a.



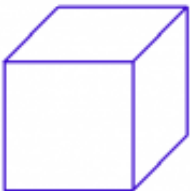
The volume of this cube is 8 cubic units.  
What is its surface area?

1 b.



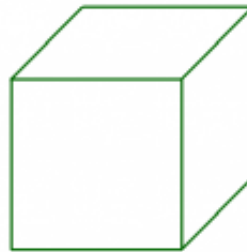
The surface area of this cube is 54 square units.  
What is its edge length?

2 a.



The surface area of this cube is 54 square units.  
What is its edge length?

2 b.



The volume of this cube is 64 cubic units.  
What is its surface area?

Name: \_\_\_\_\_ Date: \_\_\_\_\_

## Answer Key

1 a. The surface area is 24 square units.	1 b. The edge length is 3 units.
2 a. The edge length is 3 units.	2 b. The surface area is 96 square units.