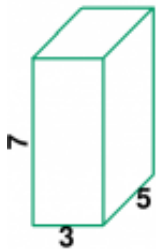


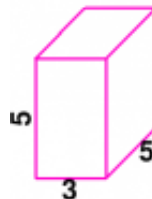
Volume/Surface Area

1 a.



Find the surface area of this rectangular prism.

1 b.




Find the surface area of this rectangular prism.

2 a.



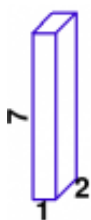
Find the surface area of this rectangular prism.

2 b.



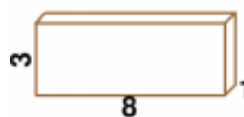
Find the volume of this rectangular prism.

3 a.



Find the surface area of this rectangular prism.

3 b.



Find the volume of this rectangular prism.

Name: _____ Date: _____

Answer Key

1 a. 142 square units.	1 b. 110 square units.
2 a. 22 square units.	2 b. The volume is 36 cubic units.
3 a. 46 square units.	3 b. The volume is 24 cubic units.